

## Count in 10s

## Count in 10s

5a. If one packet of seeds has 10 seeds, how many seeds do 9 packets of seeds have?




VF

5b. If one packet has 10 biscuits, how many biscuits do 10 packets have?




VF

6a. If one pack has 10 pens, circle the packs you need to have 80 pens.



VF

6b. If one box holds 10 toys, circle the boxes you need to hold 70 toys.



VF

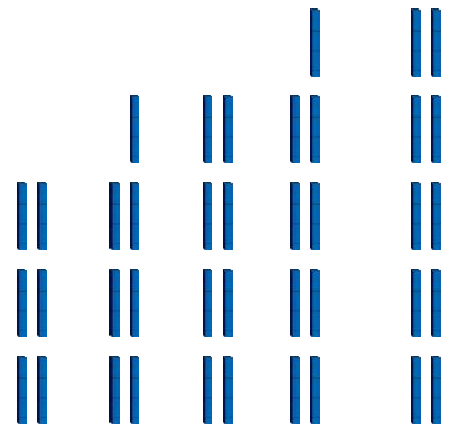
7a. Complete the sequence to find the missing numbers.



80, 70, 60, ,

VF

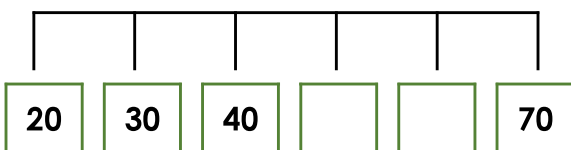
7b. Complete the sequence to find the missing numbers.



60, 70, 80, ,

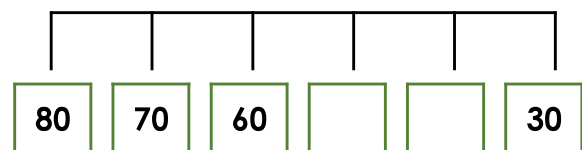
VF

8a. Label the missing numbers on the number line below.



VF

8b. Label the missing numbers on the number line below.



VF