




4. There were 8 bags of gold on Sailor John's ship.

Pirates stole 4 of Sailor John's bags.

How many bags did Sailor John have left?



6. Captain Fox had 19 sails on her ship.

6 broke in a storm.


How many sails were left on the ship?



5. The pirates caught 20 fish.


They ate 9 of them.

How many fish were left over?




7. The pirates stole 4 treasure chests on Tuesday,  
6 on Wednesday and 7 on Thursday.

How many treasure chests did the pirates steal  
altogether?



8. There are 22 crocodiles in the water. 10 more crocodiles join them.

How many crocodiles are there altogether?



10. There are 18 girl pirates and 22 boy pirates aboard the Jolly Fortune pirate ship.

How many pirates are there altogether?



9. The pirate ship travelled 36 kilometres over 2 days.

If the ship travelled 18 kilometres on the first day, how many kilometres did it travel on the second day?



11. Bluebeard spends 34 gold coins on a new pirate hat. He had 62 gold coins to start with.

How many gold coins does he have left?

