

Spring 1 Maths Activity Mat 1 Answers

Section 1

Put the numbers in order, starting with the lowest.

11 6 5 8

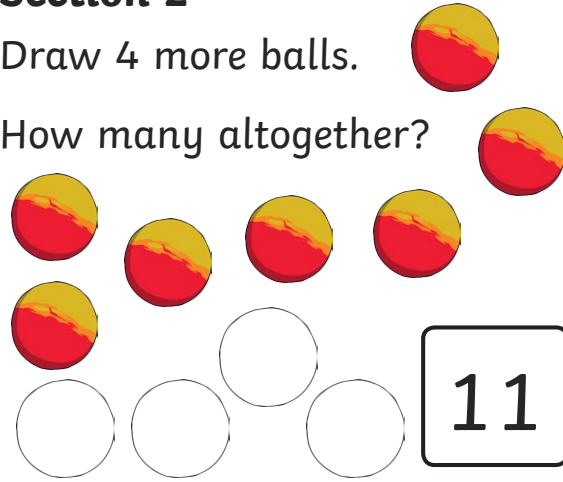
5 6 8 11



Section 2

Draw 4 more balls.

How many altogether?



Section 3

$$8 + 2 = 10$$

$$7 - 5 = 2$$

$$5 + 6 = 11$$

Section 4


Nina eats 6 sweets. How many sweets are left?



Section 5


Group the cookies in twos.

How many groups are there?




Section 6

Tick the coins which add to 11p.



Section 7

Draw 8 spots onto the ladybird. An equal number on each side.



Section 8

Fill in the missing number.

12, 14, 16, 18, 20

