

04.06.2020

L.O: To add two 2 digit numbers.

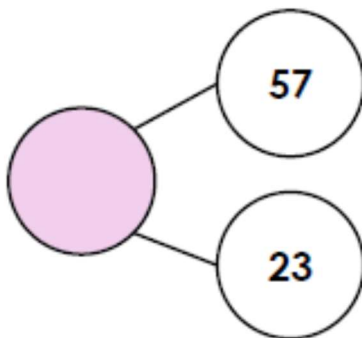
6a. Find the total.

?	
$20 + 6$	$20 + 9$



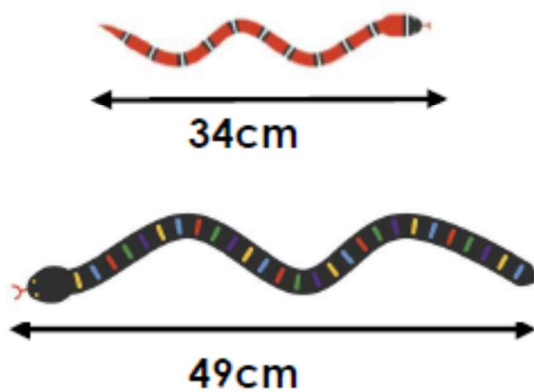
VF

7a. What is the whole?



VF

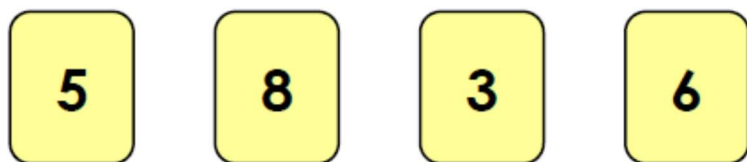
8a. Josh's pet snake is 34cm long. Olivia's pet snake is 49cm long.



How long are the snakes altogether?

Solve the below problems, using one of the methods you know.

4a. Use the digit cards to fill in the missing numbers, then solve the calculation.



$$\begin{array}{|c|} \hline 2 \\ \hline \end{array} \begin{array}{|c|} \hline \\ \hline \end{array} + \begin{array}{|c|} \hline \\ \hline \end{array} \begin{array}{|c|} \hline \\ \hline \end{array} = ?$$

How many different 2-digit totals can you make using these digit cards?



P:

5a. Choose three different pairs of items and find the total.

