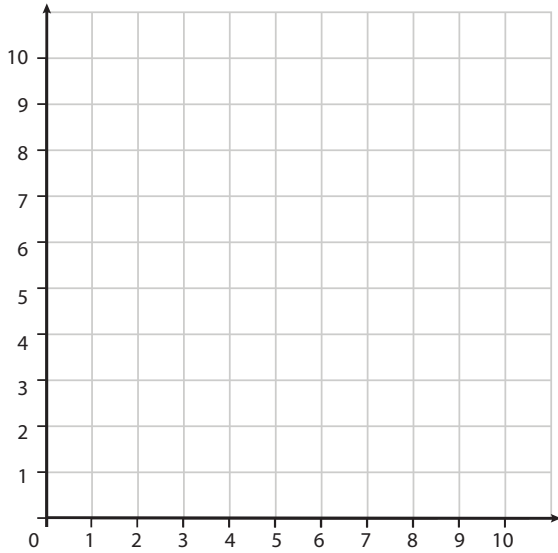


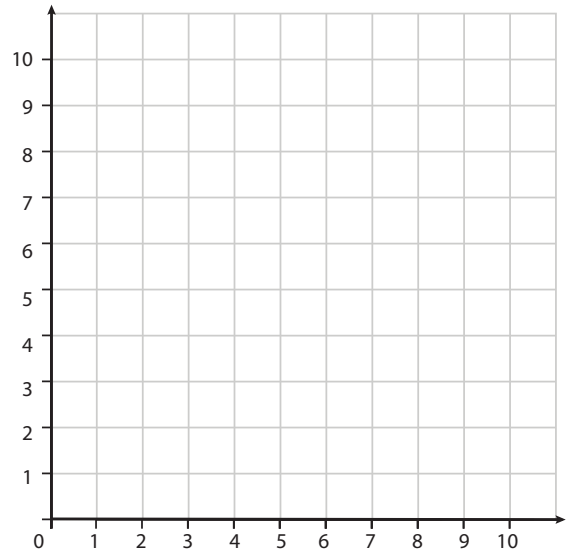
A Bit Stuck

Plotting shapes

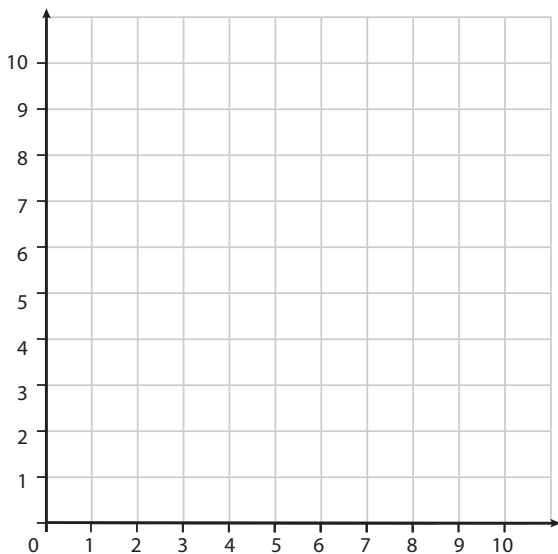
Plot the points on the grid, join them and find the missing point to make the shape.



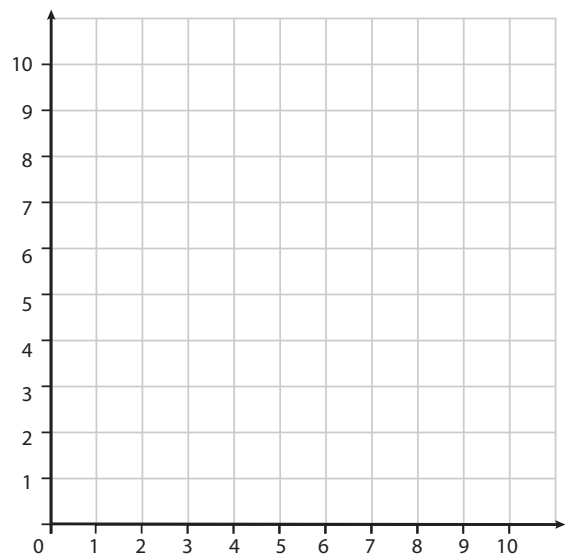
1. Square
A (3,8) B (3,2) C (6,5)



2. Rectangle
A (9,1) B (9,8) C (5,8)



3. Right-angled triangle
A (2,1) B (8,1)



4. Isosceles triangle
A (0,2) B (0,8)

Challenge

Draw your own set of 0 to 10 axes. Plot co-ordinates (4,4) and (0,4). Find the missing pairs of co-ordinates to form the vertices of 3 different squares.

A Bit Stuck

Plotting shapes

