

Maths Task - 8.6.20

Last week we began looking at adding more and counting on. Today we are going to continue looking at the skills and consolidating our understanding.

As you work through the questions, you need to show your workings out on the number line and on the tens frame (use two different colours). For the last questions, I have only included number lines but if you want to still use a tens frame to support you, you could draw your own ones out.

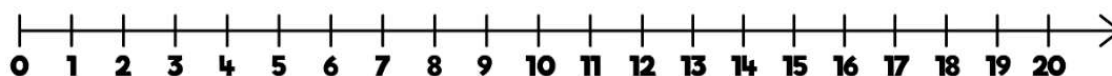
First there were 12 snakes that climbed the tree.

Then, 5 snakes came and joined them.

Now, there are _____ snakes in the tree.

Write the number sentence:

Now work out your answer.



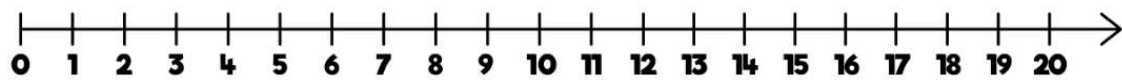
First there were 9 oranges on the tree.

Then, 6 more grew.

Now, there are _____ oranges on the tree.

Write the number sentence:

Now work out your answer.



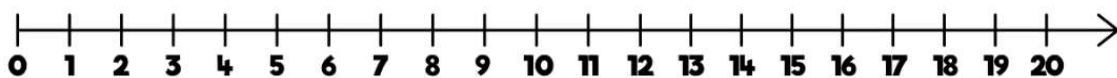
First there were 6 fish in the pond.

Then, 8 fish were put in to join them.

Now, there are _____ fish in the pond.

Write the number sentence:

Now work out your answer.



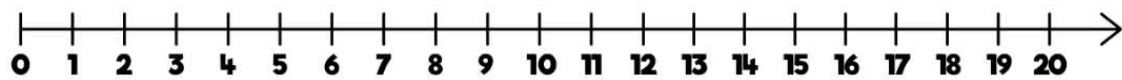
First there were 14 dogs in the forest.

Then, 5 more came along.

Now, there are _____ dogs in the forest.

Write the number sentence:

Now work out your answer.



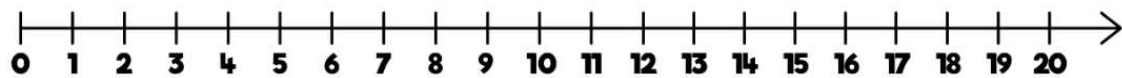
First there were 7 cupcakes in the kitchen.

Then, 9 more were cooked.

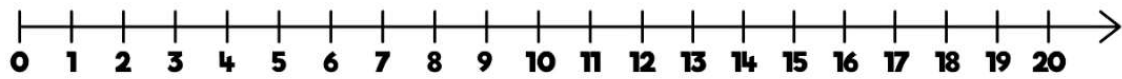
Now, there are _____ cupcakes in the kitchen.

Write the number sentence:

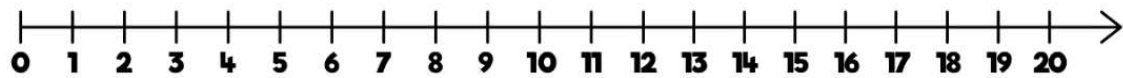
Now work out your answer.



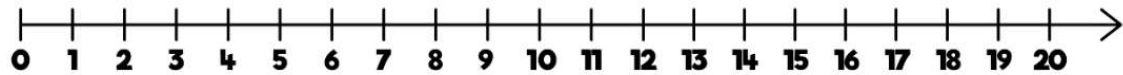
A) $7 + 3 =$



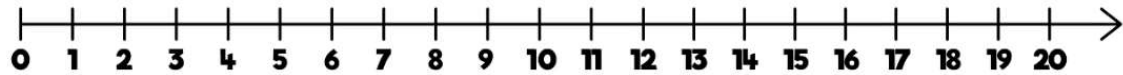
B) $1 + 16 =$



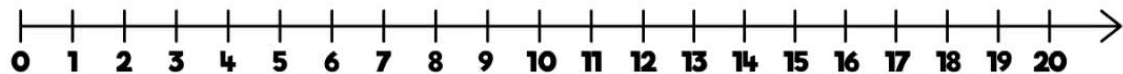
C) $4 + 12 =$



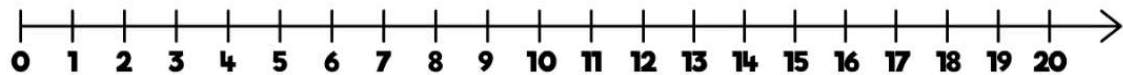
D) $15 + 5 =$



E) $2 + 15 =$



F) $2 + 3 =$



G) $18 + 1 =$

