


Maths Task - 17.6.20

Task 1:

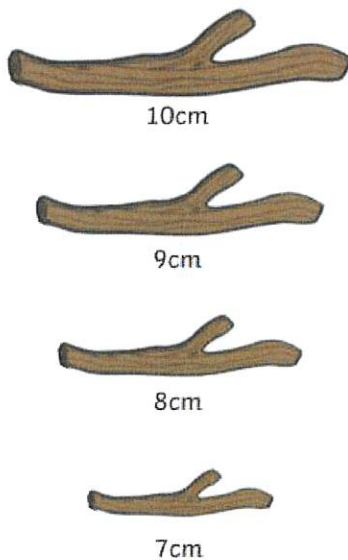
Have a go at these worded problems, remember you can use items from around your home to help you.

Each of the children in the group finds 2 things.
What might the length of their 2 objects be in total?



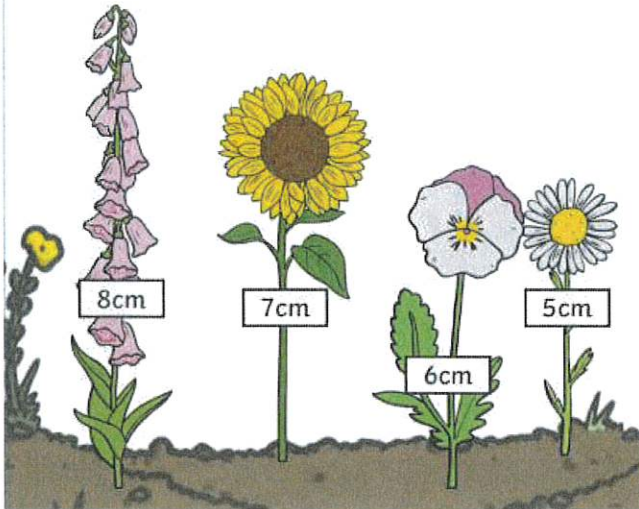
Each child cuts 3cm off their sticks.

How long is each stick now?



The children's plants have grown 4cm since they measured them.

Can you work out their new heights?



Task 2:

Have a try now at Mojimaths addition and subtraction. Some of the numbers in the calculations have been replaced by emojis. Can you use the given calculations to work out the numbers represented by the emojis?

You do not need to work all of them out, unless you are really wanting a challenge.

MojiMaths Addition and Subtraction



+ = 11
 - = 7
 = =

+ = 13
 - = 1
 = =

+ = 12
 - = 4
 = =

+ = 10
 - = 2
 = =