


1. Complete the following number sequence:

65, 70, 75, 80, ,

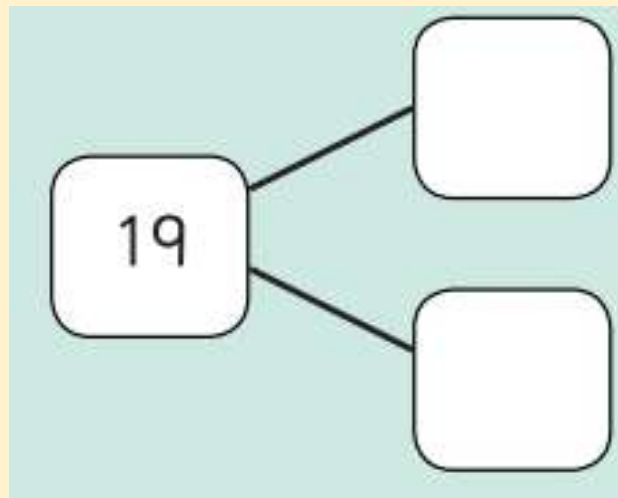
2. Write the number that is one more and one less than 84.




3. Have a look at the months of the year on your sheet. One is missing from this sequence. Which month is missing?

January, February, March, _____, May


4. Can you think of two numbers that you can add together to make 19?



5. Draw the clock hands on to show 10 o'clock.



6. Write the number ninety-three.



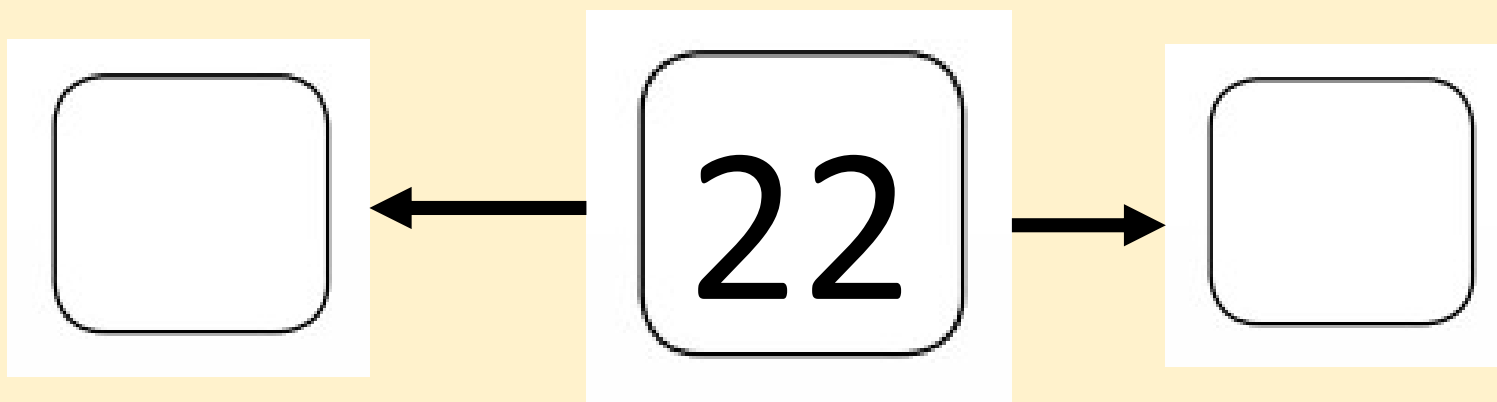
7. Fill in the numbers for this number sentence.

is 1 more than

8. Put these numbers in order from the smallest to the biggest.

5	13	8	11
<input type="text"/>	<input type="text"/>	<input type="text"/>	<input type="text"/>
smallest			biggest

9. Write the number that is one more and one less than 22.



10. Have a look at the coins below. How much money is there?



11. The first snake is 12cm long. The second snake is only half as long as the first. How long is the smaller snake?

