

The 2 times-table

1 Write a fact from the 2 times-table to match the picture.

a)




$$\square \times \square = \square$$

b)



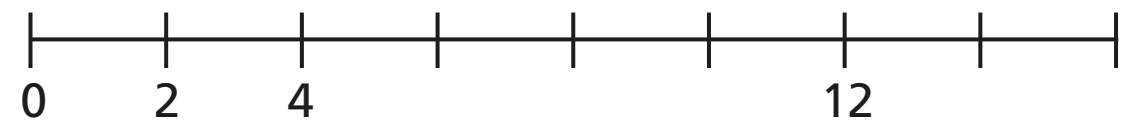
$$\square \times \square = \square$$

c)



$$\square \times \square = \square$$

2 a) Complete the number line.



b) Which times-table does the number line show?


Tick your answer.

1 times-table 2 times-table


3 times-table

How do you know?


3 Complete the array and times-table fact so that they match.



$$2 \times 2 = \square$$



$$2 \times 5 = \square$$



$$2 \times \square = 8$$

4 Complete the number sentences.

a) $3 \times 2 =$

f) $= 12 \times 2$

b) $= 9 \times 2$

g) $2 \times$ $= 2$

c) $2 \times 5 =$

h) $2 \times 0 =$

d) $2 \times$ $= 4$

i) $14 = 2 \times$

e) $12 =$ $\times 2$

j) $\times 2 = 22$

5 Teddy has £8

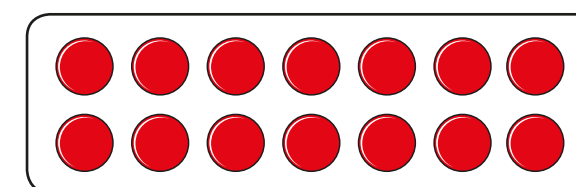
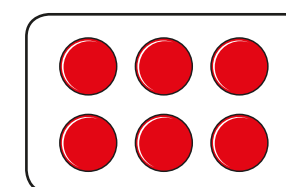
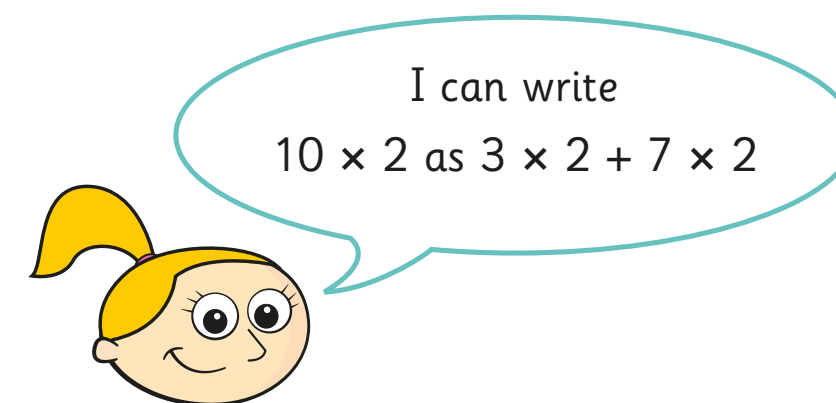
Rosie has twice as much money as Teddy.

How much money does Rosie have?

Rosie has £



6 Eva is writing 10×2 in different ways.



Find three more ways that you can write 10×2

Use counters to help you.

\times $+$ \times

\times $+$ \times

\times $+$ \times

Compare answers with a partner.

