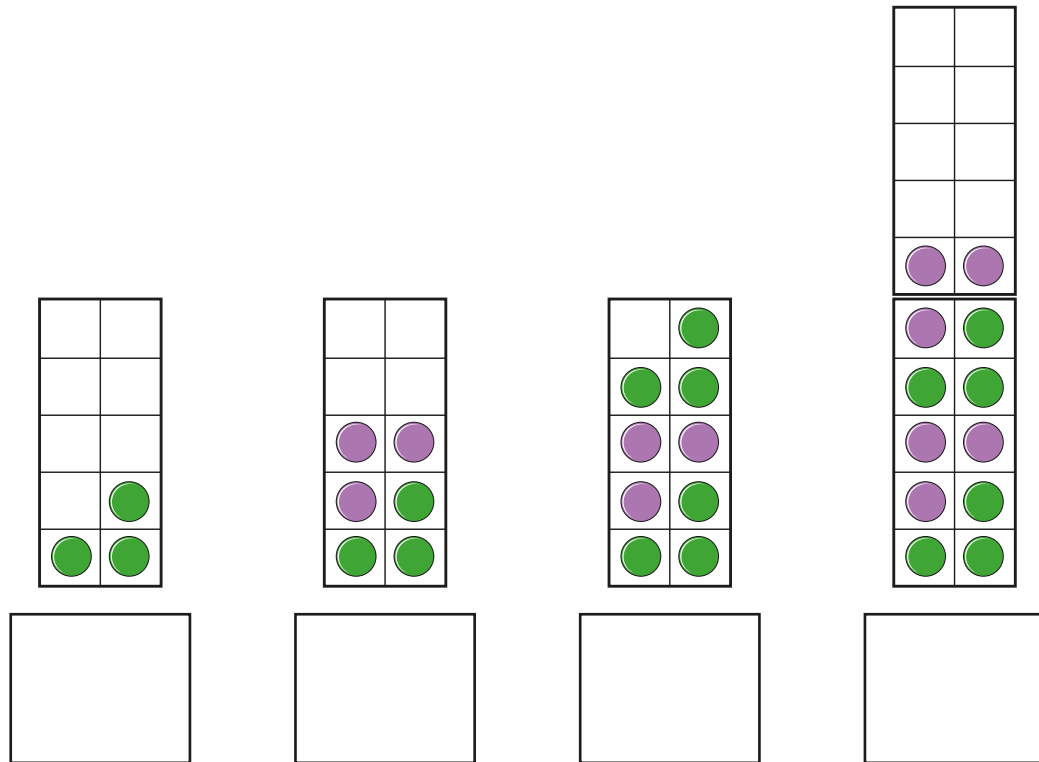
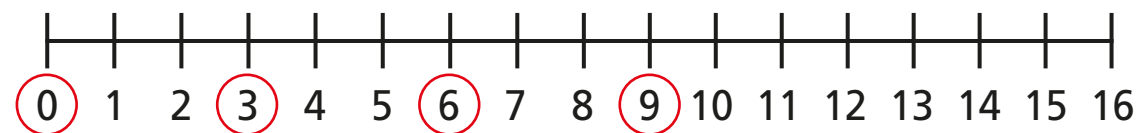


Count in 3s

1 What numbers are represented?



2 Use the number line to help you complete the sentence.

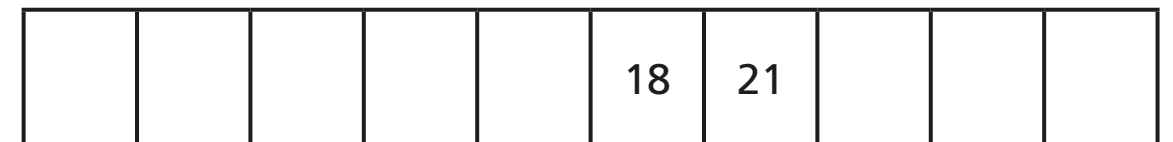
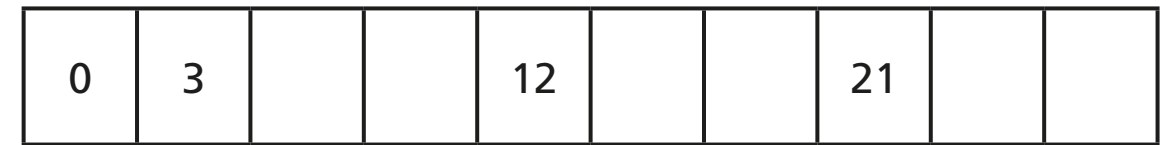


The numbers that are circled are counting up in
steps of


Draw circles on the number line to continue the pattern.



3 Complete the number tracks.



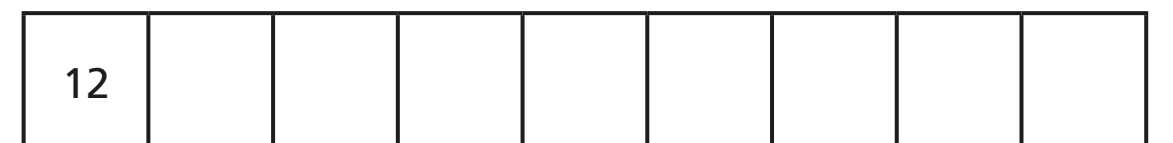
4 Rosie has 12 stickers.



She collects 3 more stickers each day.

How many stickers will she have in 8 days?

Complete the number track to help you.



Rosie will have stickers in 8 days.

5 Is this true or false? Circle your answers.

a) When you count in 3s from zero, you will say the number 9

true

false

b) When you count in 3s from zero, you will say the number 11

true

false

How do you know?



6 Count up in 3s from 3
Colour the numbers you say on the number grid.

| | | | | | | | | | |
|----|----|----|----|----|----|----|----|----|----|
| 1 | 2 | 3 | 4 | 5 | 6 | 7 | 8 | 9 | 10 |
| 11 | 12 | 13 | 14 | 15 | 16 | 17 | 18 | 19 | 20 |
| 21 | 22 | 23 | 24 | 25 | 26 | 27 | 28 | 29 | 30 |
| 31 | 32 | 33 | 34 | 35 | 36 | 37 | 38 | 39 | 40 |
| 41 | 42 | 43 | 44 | 45 | 46 | 47 | 48 | 49 | 50 |

7 Ron is counting in 2s from 0

Complete the number track to show the numbers Ron will say.

| | | | | | |
|--|--|--|--|--|--|
| | | | | | |
|--|--|--|--|--|--|

Kim is counting in 3s from 0

Complete the number track to show the numbers Kim will say.

| | | | | | |
|--|--|--|--|--|--|
| | | | | | |
|--|--|--|--|--|--|

Whitney adds Ron and Kim's numbers together.

Complete the number track to show the numbers Whitney will say.

| | | | | | |
|--|--|--|--|--|--|
| | | | | | |
|--|--|--|--|--|--|

What do you notice about Whitney's number pattern?

