


1. Complete the following number sequence:

_____, 50, 45, 40, _____, 30, _____

2. Put these in order from tallest to smallest.



A



B



C

3. Have a look at the days of the week on your sheet. One is missing from this sequence. Which day is missing?

Thursday, Friday, Saturday, _____

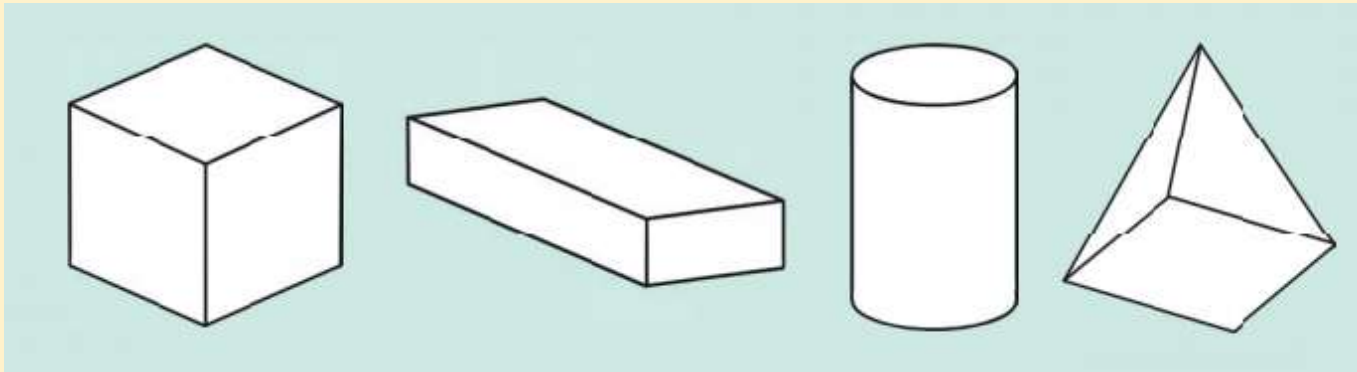
4. There are some five ladybirds who each have 5 spots. How many spots in total?



There are

spots in total.

5. Label these shapes.




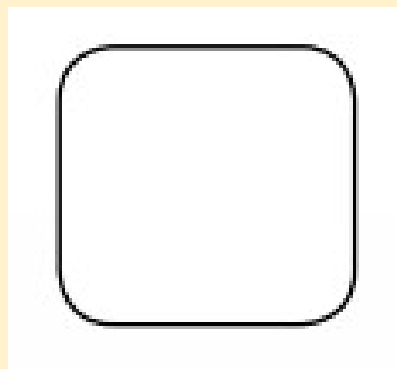
Cube

Cylinder


Cuboid

Pyramid

6. Write the number sixteen and sixty-one.



7. Colour 35 petals in.



8. Put these numbers in order from the smallest to the biggest.

19	3	7	17
<input type="text"/>	<input type="text"/>	<input type="text"/>	<input type="text"/>
smallest			biggest

9. Complete the sequence.

0	5	10					
---	---	----	--	--	--	--	--

10. Roy made 14 cookies. He ate 4 of them. His dad ate 3. How many does Roy have left?

