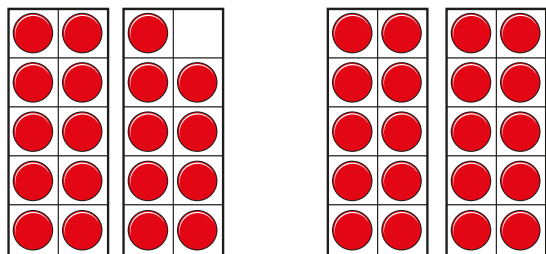
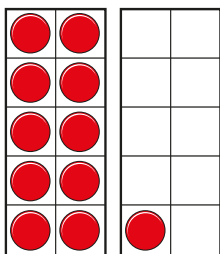


Order numbers within 50



1 a) What are the numbers?






Write the numbers in order.
Start with the smallest number.

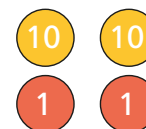
smallest

greatest

b) What are the numbers?







Write the numbers in order.
Start with the smallest number.

smallest

greatest

2 Write the numbers in order.
Start with the smallest number.

a)



smallest

greatest



b)

39	49	29
----	----	----

smallest

greatest

- 3 Write the numbers in order.
Start with the greatest number.

17	41	28
----	----	----

greatest

smallest

- 4 Complete the number sentence.

2 tens and 3 ones < < forty-one

Is there more than one answer?

