

## Telling Time to 5 Minutes

## Telling Time to 5 Minutes

5a. True or false?


The clock shows the time 20 to 6.



VF


5b. True or false?

The clock shows the time 10 past 1.



VF

6a. What is the time?




VF

6b. What is the time?



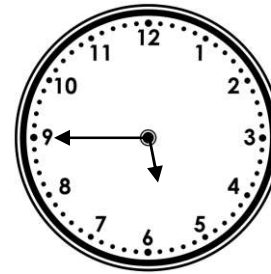
VF

7a. What is the time 10 minutes after the time shown?



VF


7b. What is the time 15 minutes after the time shown?



VF

8a. Draw the time below on the clock.


10 to 7



VF

8b. Draw the time below on the clock.

25 past 6



VF