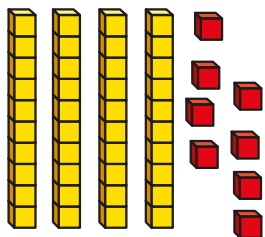
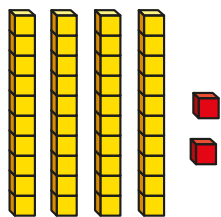
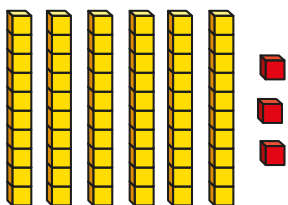


Ordering numbers

1 a) What numbers are shown?







b) Write the numbers in order.
Start with the smallest.

smallest

greatest

2 Three hens lay these eggs.

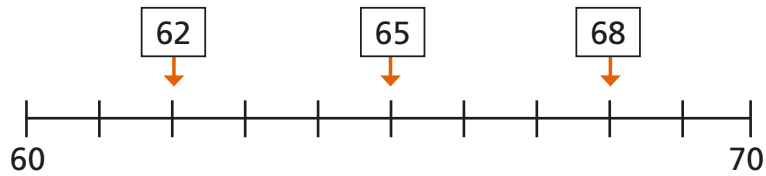
Hen 1	Hen 2	Hen 3

Put the number of eggs in order.
Start with the greatest number.

greatest

smallest

- 3 Three numbers are labelled on a number line.



Write the numbers in order.
Start with the smallest number.

smallest

greatest

- 4 Put the numbers in order.
Start with the smallest number.

a) 53, 58, 47

, ,

b) 19, 83, 7

, ,

- 5 Tick all the numbers between 80 and 100

72

95

11

85

9