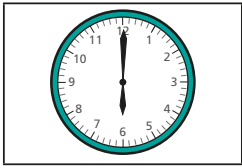
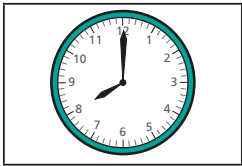


Time to the hour

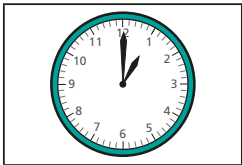
1 Match the clocks to the times.



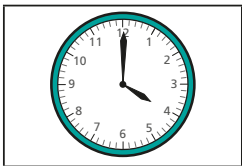
8 o'clock



6 o'clock

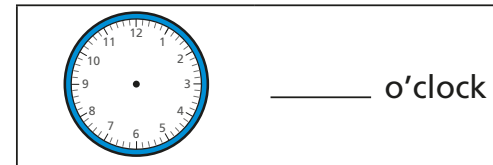
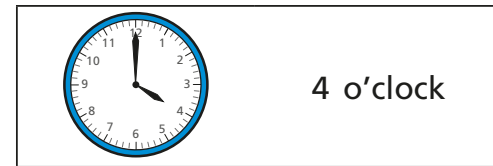
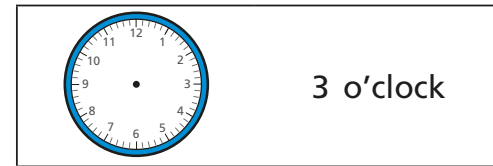
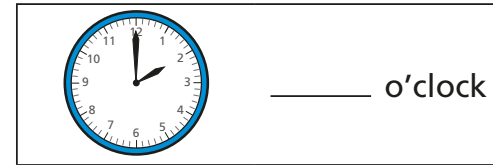
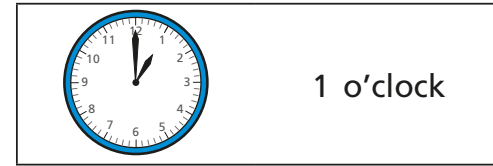


4 o'clock



1 o'clock

2 Complete the pattern.



What time comes next?

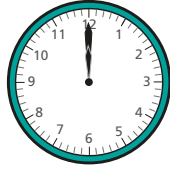


3 Tick the time that matches the clock.



3 o'clock

12 o'clock




3 o'clock


12 o'clock

4 Tick the time that is more likely.

a) Mo goes to school.



b) Mo goes to bed.



c) Mo has lunch.

