





# Number bonds – to 5

- 1   How many more to make 5?  
Place counters in the empty squares to find out.




$\boxed{4}$  and  $\boxed{1}$  makes **5**

$$\boxed{4} + \boxed{1} = 5$$




$\boxed{\phantom{0}}$  and  $\boxed{\phantom{0}}$  makes **5**

$$\boxed{\phantom{0}} + \boxed{\phantom{0}} = 5$$



$\boxed{\phantom{0}}$  and  $\boxed{\phantom{0}}$  makes **5**

$$\boxed{\phantom{0}} + \boxed{\phantom{0}} = 5$$



$\boxed{\phantom{0}}$  and  $\boxed{\phantom{0}}$  makes **5**

$$\boxed{\phantom{0}} + \boxed{\phantom{0}} = 5$$