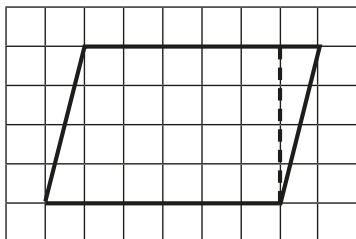


1 On a piece of squared paper, copy this parallelogram and cut it out.



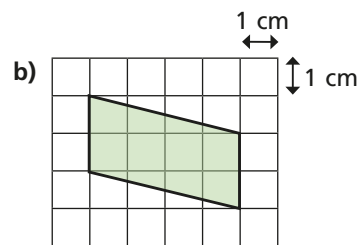
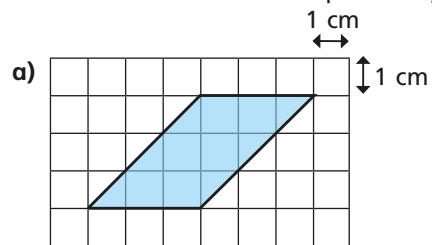
a) Create a rectangle by cutting off the right-angled triangle and moving it.

b) Complete the sentences.

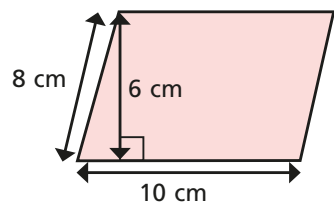
The area of the rectangle is squares.

The area of the parallelogram is squares.

2 Calculate the areas of the parallelograms.



3 Huan is finding the area of the parallelogram.



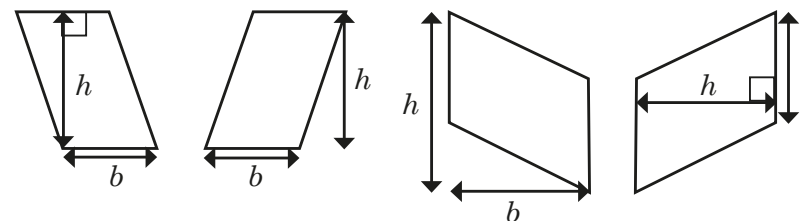
$$10 \times 8 = 80 \text{ cm}^2$$

a) What mistake has Huan made?

b) What is the correct answer?

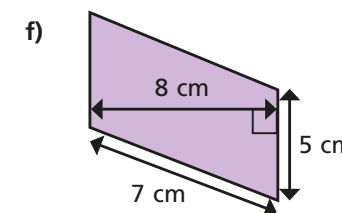
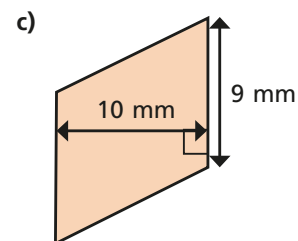
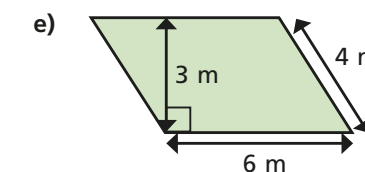
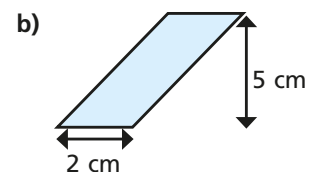
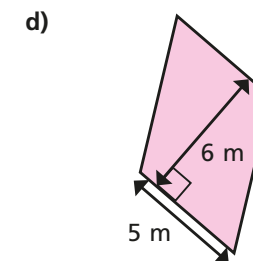
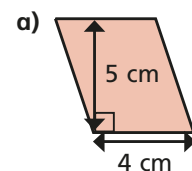
4 Esther has labelled the bases and heights for four parallelograms.

Three are correct; one is incorrect. Which shapes have been correctly labelled?



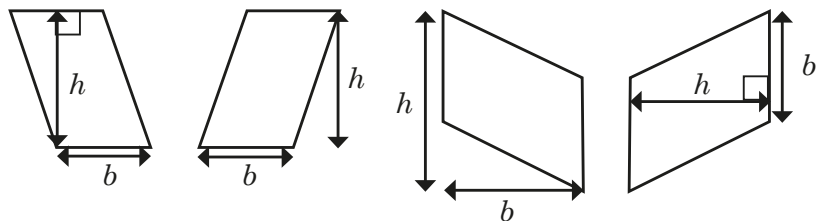
Explain to a partner why one is incorrect.

5 Calculate the areas of the parallelograms.



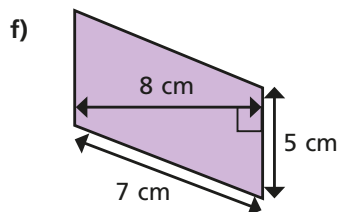
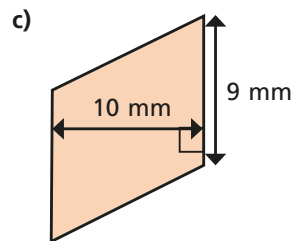
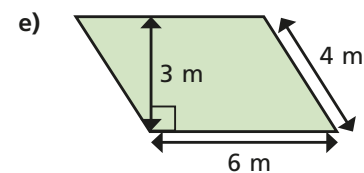
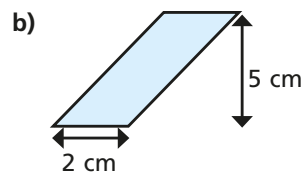
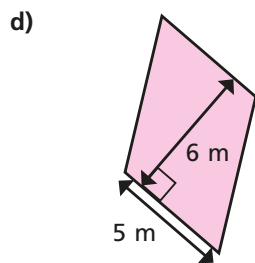
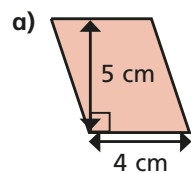
4 Esther has labelled the bases and heights for four parallelograms.

Three are correct; one is incorrect. Which shapes have been correctly labelled?

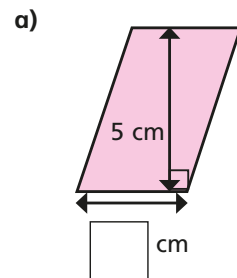


Explain to a partner why one is incorrect.

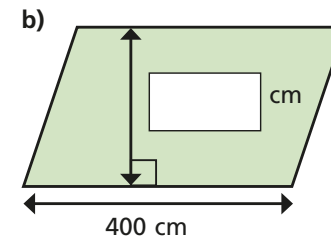
5 Calculate the areas of the parallelograms.



6 Find the missing lengths.

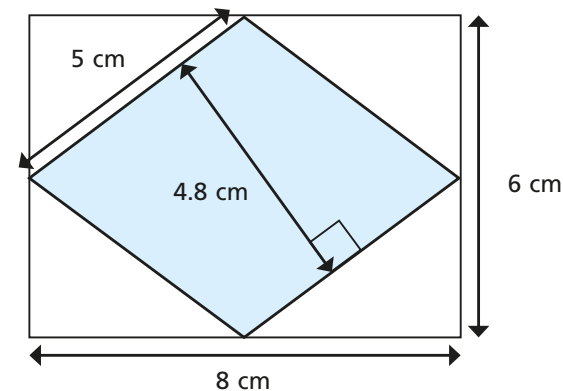


area = 15 cm^2



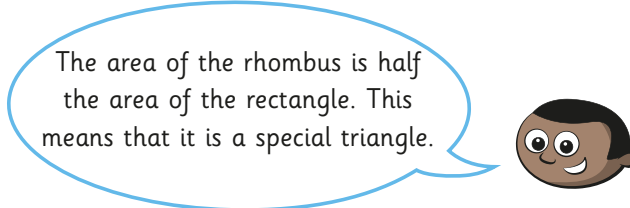
area = 12 m^2

7 Here is a rhombus inside a rectangle.



a) Calculate the area of the rhombus.

b)



Explain to a partner why Mo is wrong.