

Friday 27th June 2025 – Homework Using practical resources solve the questions below. When finding out how many altogether try to practise counting in 2's, 5's or 10's. The first one is done for you.


Introducing Fractions of Amounts

Finding Quarter

Find a quarter of these amounts. Use counters or buttons to help, or draw circles around the pictures to find the answer. The first one has been done for you.

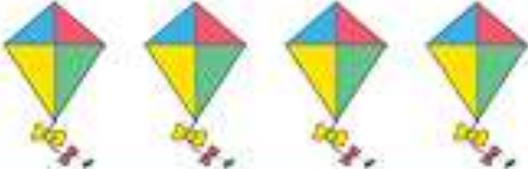
Quarter of is $\frac{1}{4}$ of -

sweets



Quarter of is


kites



$\frac{1}{4}$ of -

Quarter of is


cats



$\frac{1}{4}$ of -

Quarter of is


flowers



$\frac{1}{4}$ of -

Quarter of is

trees



$\frac{1}{4}$ of -

Quarter of is

stars



$\frac{1}{4}$ of -