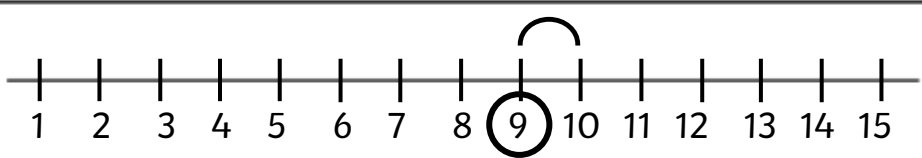
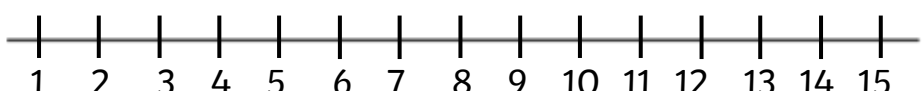
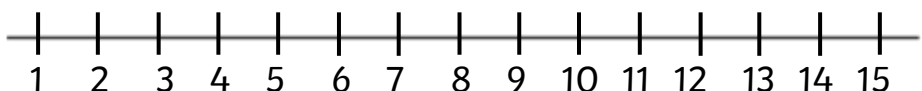
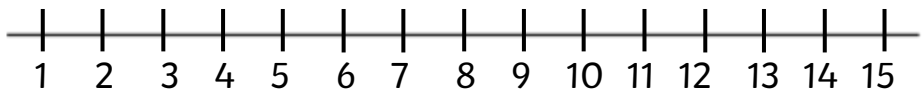


Home learning 12.12.25

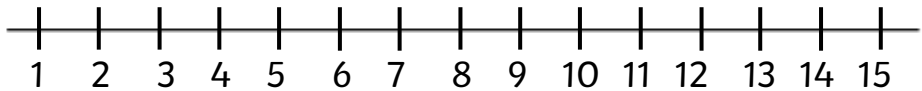
$\underline{10} - 1 = \textcircled{9}$	 A number line from 1 to 15. A circle is drawn around the number 9. A curved arrow starts at 10 and points to 9, indicating a subtraction of 1.
--	---

$8 - 1 = \square$	 A number line from 1 to 15.
-------------------	--

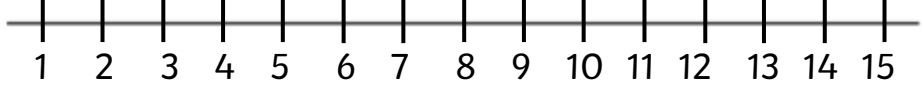
$4 + 1 = \square$	 A number line from 1 to 15.
-------------------	--

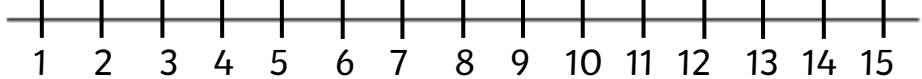
$5 - 2 = \square$	 A number line from 1 to 15.
-------------------	--

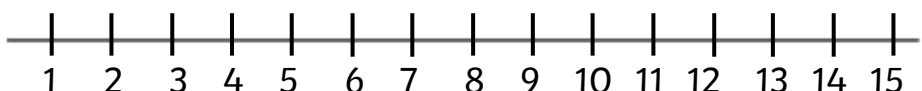
$7 + 2 = \square$	 A number line from 1 to 15.
-------------------	---

$9 - 1 = \square$	 A number line from 1 to 15.
-------------------	--

$8 + 2 = \square$	 A number line from 1 to 15.
-------------------	--

$10 - 1 = \square$	 A number line from 1 to 15.
--------------------	--

$9 + 1 = \square$	 A number line from 1 to 15.
-------------------	--

$5 - 1 = \square$	 A number line from 1 to 15.
-------------------	--

$6 + 2 = \square$	 A number line from 1 to 15.
-------------------	--