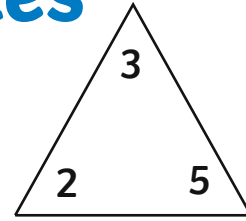
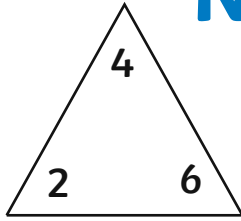


Number Families



$$\square + \square = \square$$

$$\square + \square = \square$$

$$\square + \square = \square$$

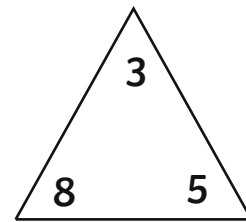
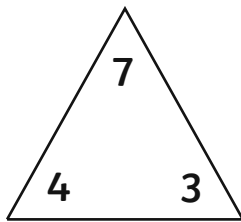
$$\square + \square = \square$$

$$\square - \square = \square$$

$$\square - \square = \square$$

$$\square - \square = \square$$

$$\square - \square = \square$$



$$\square + \square = \square$$

$$\square + \square = \square$$

$$\square + \square = \square$$

$$\square + \square = \square$$

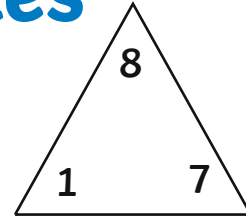
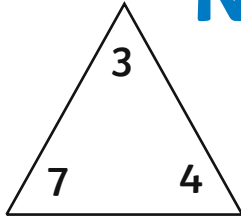
$$\square - \square = \square$$

$$\square - \square = \square$$

$$\square - \square = \square$$

$$\square - \square = \square$$

Number Families



$$\square + \square = \square$$

$$\square + \square = \square$$

$$\square - \square = \square$$

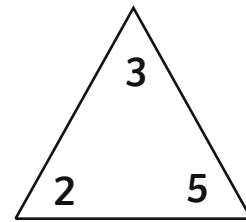
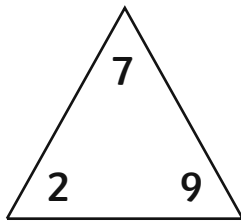
$$\square - \square = \square$$

$$\square + \square = \square$$

$$\square + \square = \square$$

$$\square - \square = \square$$

$$\square - \square = \square$$



$$\square + \square = \square$$

$$\square + \square = \square$$

$$\square - \square = \square$$

$$\square - \square = \square$$

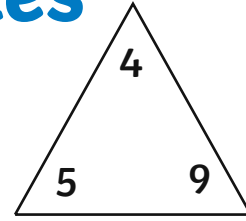
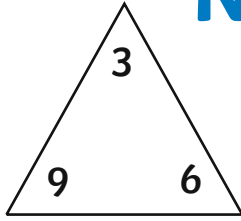
$$\square + \square = \square$$

$$\square + \square = \square$$

$$\square - \square = \square$$

$$\square - \square = \square$$

Number Families



$$\square + \square = \square$$

$$\square + \square = \square$$

$$\square + \square = \square$$

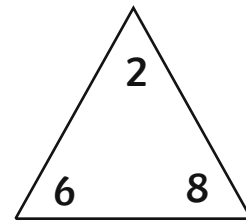
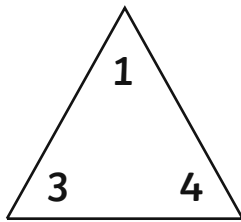
$$\square + \square = \square$$

$$\square - \square = \square$$

$$\square - \square = \square$$

$$\square - \square = \square$$

$$\square - \square = \square$$



$$\square + \square = \square$$

$$\square + \square = \square$$

$$\square + \square = \square$$

$$\square + \square = \square$$

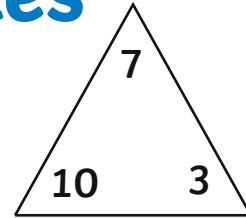
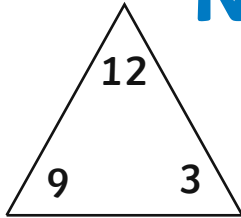
$$\square - \square = \square$$

$$\square - \square = \square$$

$$\square - \square = \square$$

$$\square - \square = \square$$

Number Families



$$\square + \square = \square$$

$$\square + \square = \square$$

$$\square + \square = \square$$

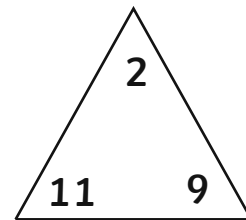
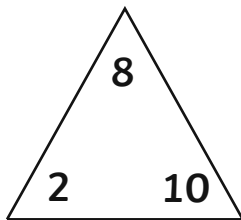
$$\square + \square = \square$$

$$\square - \square = \square$$

$$\square - \square = \square$$

$$\square - \square = \square$$

$$\square - \square = \square$$



$$\square + \square = \square$$

$$\square + \square = \square$$

$$\square + \square = \square$$

$$\square + \square = \square$$

$$\square - \square = \square$$

$$\square - \square = \square$$

$$\square - \square = \square$$

$$\square - \square = \square$$